
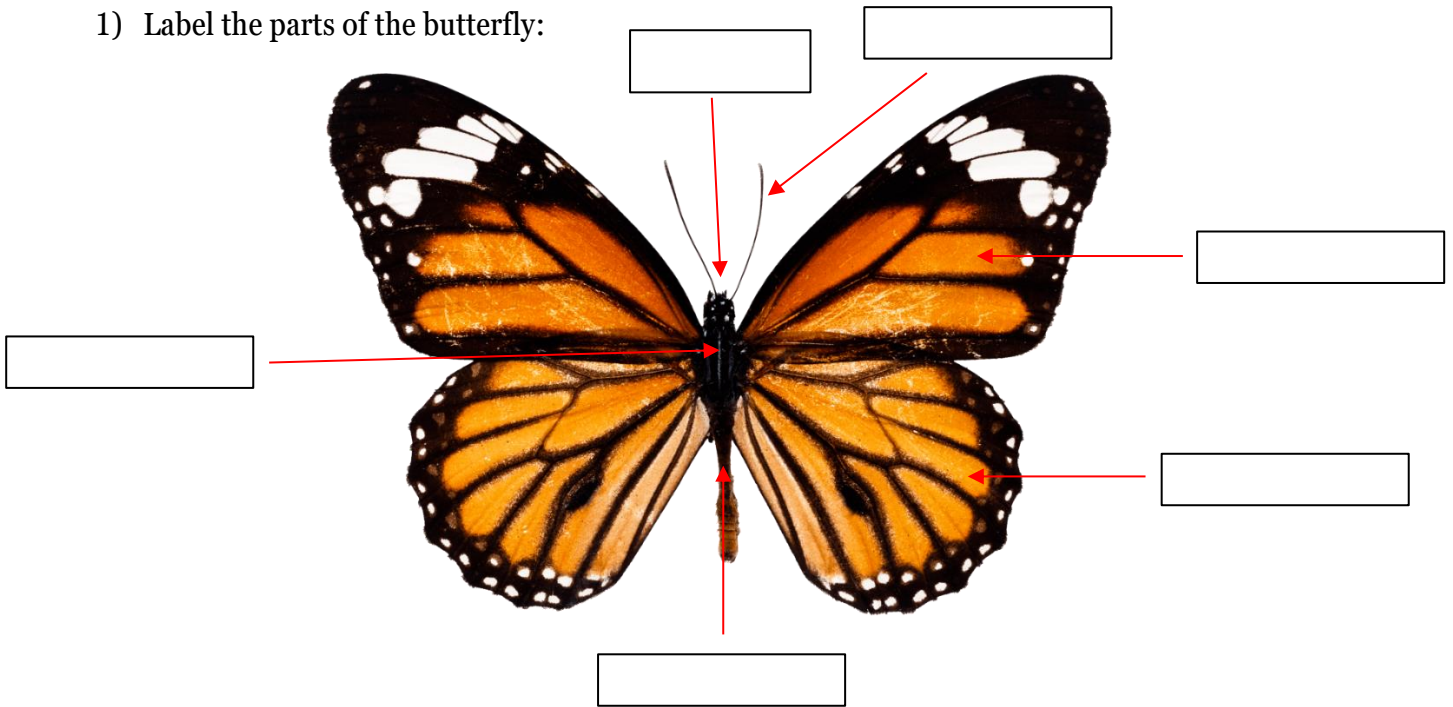



BUTTERFLIES




1) Label the parts of the butterfly:



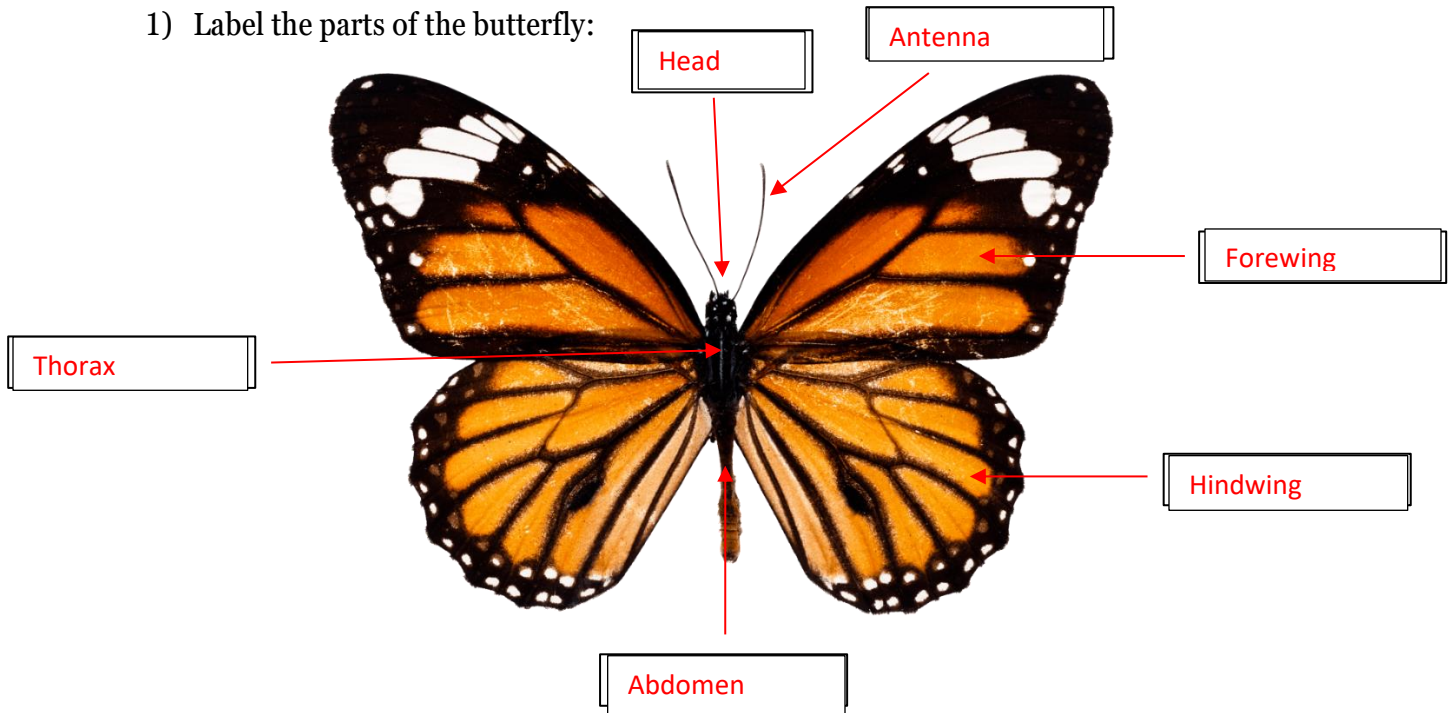
- 2) Butterflies have ___ legs.
- 3) Butterflies have ___ stages in their life cycle.
- 4) The _____ stage is when the caterpillar hatches out of its egg and begins to eat leaves.
- 5) The pupa stage is when the chrysalis is formed.
 - a) True
 - b) False
- 6) Butterflies use their wings in order to fly around and drink _____ from flowers.
- 7) Butterflies use their feet to taste their food.
 - a) True
 - b) False
- 8) Flowers use _____ to make seeds through pollination.
- 9) The male part of the flower is called the (stamen/pistil). The female part of the flower is called the (stamen/pistil).



BUTTERFLIES



1) Label the parts of the butterfly:



2) Butterflies have 6 legs.

3) Butterflies have 4 stages in their life cycle.

4) The larva stage is when the caterpillar hatches out of its egg and begins to eat leaves.

5) The pupa stage is when the chrysalis is formed.

- a. True
- b. False

6) Butterflies use their wings in order to fly around and drink nectar from flowers.

7) Butterflies use their feet to taste their food.

- a. True
- b. False

8) Flowers use pollen to make seeds through pollination.

9) The male part of the flower is called the (stamen/pistil). The female part of the flower is called the (stamen/pistil).